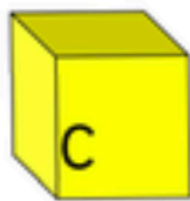
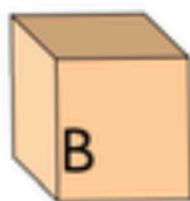
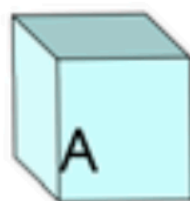


How many ways?

You have three boxes. You have 10 buttons.



How many ways can you put the buttons in the boxes?



I have done one for you:

Box A	Box B	Box C
8	1	1