

Thursday


Let your teacher know

Tick one



Self Assessment

Subtraction Fun in the Snow



How Many Left?

Find each set in the picture.
Print the total of each set.


If the set has two less, how many are left?
Finish the number sentence.
Print the difference.



$$\underline{\quad} - 2 = \underline{\quad}$$



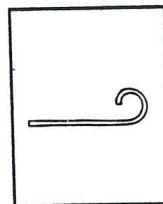
$$\underline{\quad} - 2 = \underline{\quad}$$



$$\underline{\quad} - 2 = \underline{\quad}$$



$$\underline{\quad} - 2 = \underline{\quad}$$



$$\underline{\quad} - 2 = \underline{\quad}$$



$$\underline{\quad} - 2 = \underline{\quad}$$