



# Comparing Fruit Mass


Look at the fruit on the equal-arm scales. Finish the sentences below each picture to make the statement true using the words **heavier**, **lighter** or **equal**.




The apple is  
\_\_\_\_\_  
than the pineapple.




The orange is  
\_\_\_\_\_  
than the blueberries.




The kiwi fruit is  
\_\_\_\_\_  
to the banana.



The strawberry is  
\_\_\_\_\_  
than the mango.



The banana is  
\_\_\_\_\_  
than the cherries.



The orange is  
\_\_\_\_\_  
to the apple.

## Challenge

Compare how heavy the fruit from your lunchbox is with someone else's fruit in your class. Was it heavier, lighter or equal?